


Subject: Maths

U K G

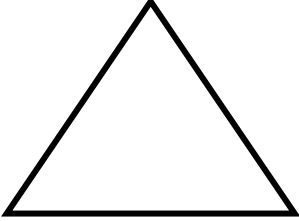
Name :

Roll No :

१. जोडा मिलाउनुहोस् ।



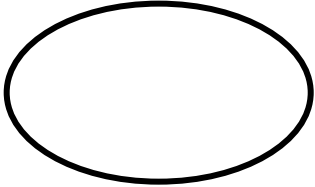
त्रिभूज



गोलाकार



वर्ग

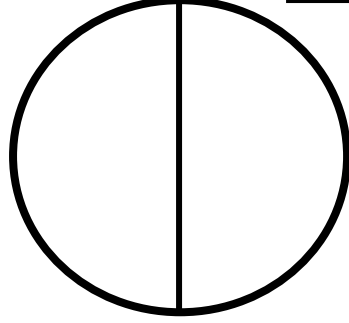

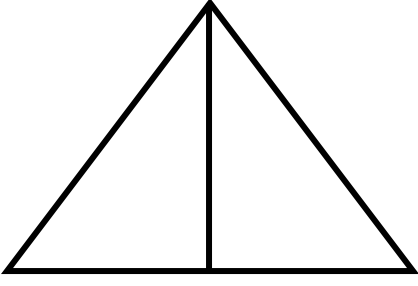


आयातकार



अन्डाकार

आधा भागमा मात्र रड भर्नुहोस् ।



२(क). ठुलो देखि सानो पैसाको क्रम मिलाउनुहोस् ।



१. _____

२. _____

३. _____

४. _____


५. _____




२ (ख). कतिवटा पैसा बराबर अगाडीको पैसा हुन्छ ? ✓ चिन्ह लगाउनुहोस् ।


२५ पैसा				
१० पैसा				
५० पैसा				
७५ पैसा				
१०० पैसा				


3. Write down the time. समय लेख्नुहोस् ।

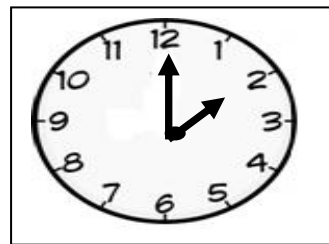


It is 3 O' Clock.
३ बज्यो ।

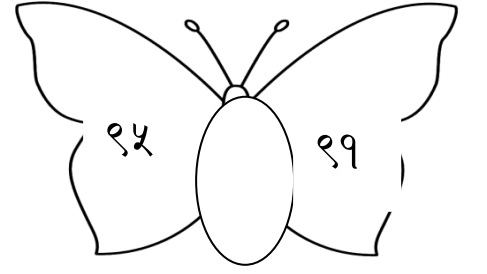
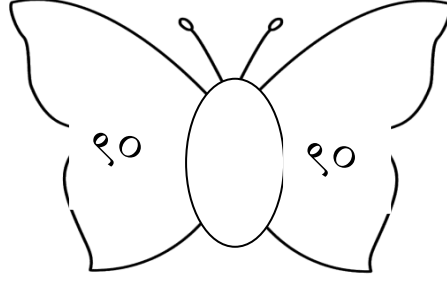
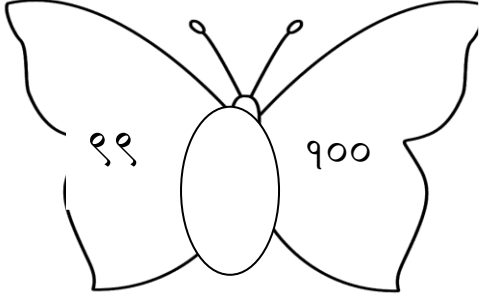
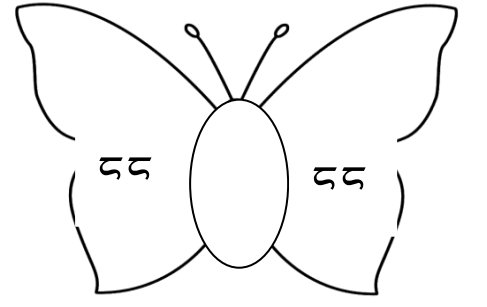
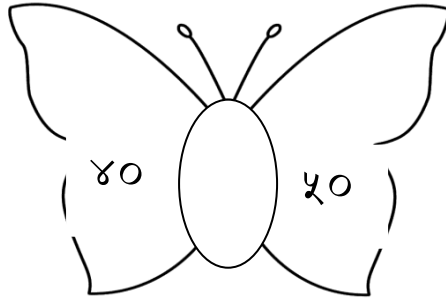
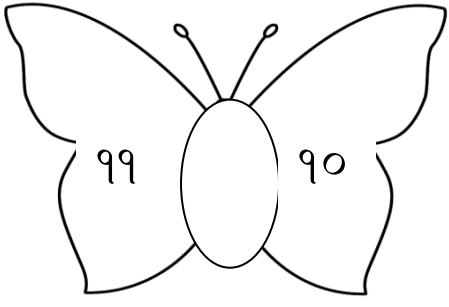








४. ठूलो (>), सानो (<) वा बराबर (=) चिन्ह थप्नुहोस् ।



५. खाली ठाउँ भरेर ५९ देखि १०० सम्म पूरा गर्नुहोस् ।

५९									
	६२								
		७३							
			८४						
				९५					

६. अगाडि, पछाडि र बिचमा कुन अङ्क आउँछ, लेख्नुहोस् ।

_____ ८, ९

_____ ११ _____

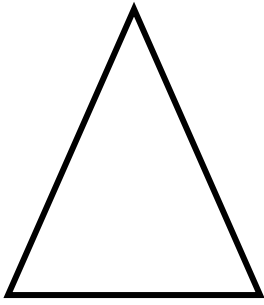
१५, १६ _____

५१ _____ ५३

५८ _____ ६०

_____, _____ ८०

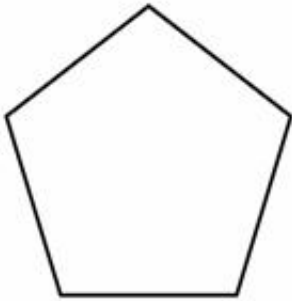
7. Complete the sentences.



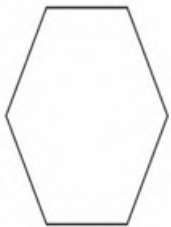
It is a _____ .
It has _____ sides.




It is a _____
It has _____ sides.



It is a _____
It has _____ sides.



A hexagon has _____ sides.



It is a _____
It has _____ sides.

8. Complete the multiplication table of 2 and 3.

2 ones is

3 ones is

2 twos are

3 twos are

2 threes are

3 threes are

2 fours are

3 fours are

2 fives are

3 fives are

2 sixes are

3 sixes are

2 sevens are

3 sevens are

2 eights are

3 eights are

2 nines are

3 nines are

2 tens are

3 tens are



९. जोड (+) गर्नुहोस् वा घटाऊ (-) गर्नुहोस् ।

